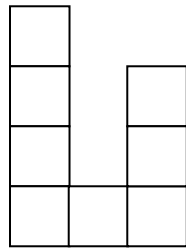



Homework Assignment 3B1

(To be used following Lesson 11)

Name: _____ Date: _____


1. Determine the area of the figure in square units.
Explain your way of finding the area.



 = 1 square unit

Area = _____ sq. units

2. Determine the volume of the rectangular prism below. Then explain how you found the volume.



Volume = _____ cubic units