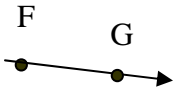

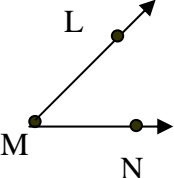
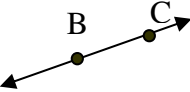



Homework Assignment 4B1

(To be used following Lesson 9)

Name: _____ Date: _____

1. Draw a line to match each drawing with its description.

	<p>A</p> 			
<p>A point is a place on a line, ray, or angle.</p>	<p>A ray has a starting point, and it goes in a particular direction.</p>	<p>Line segments are parts of lines. They have two endpoints.</p>	<p>Angles are made of two rays and the space between the rays.</p>	<p>Lines go in two directions. They are named by points.</p>

2. Draw and write a description of a trapezoid.

