

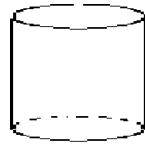
Homework Assignment 4A1

(To be used following Lesson 4)

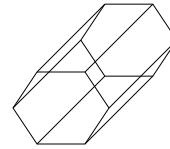
Name: _____ Date: _____



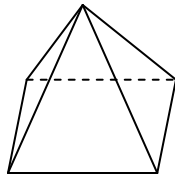
Cone



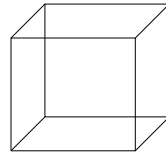
Cylinder



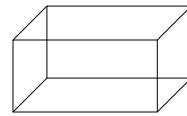
Hexagonal
Prism



Square
Pyramid



Cube



Rectangular
Prism

Choose two of the above shapes and write a description of them. Be sure to include data about their faces, edges, and vertices.