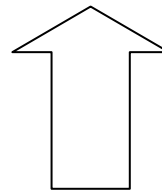
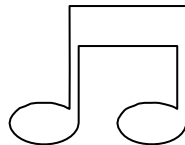

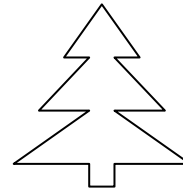
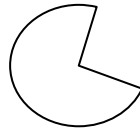
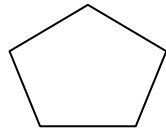
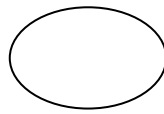


# Homework Assignment 2B3

(To be used following Lesson 11)

Name: \_\_\_\_\_ Date: \_\_\_\_\_

Look at the pictures below. Circle the objects that have one or more lines of symmetry, and then draw the lines of symmetry for the circled objects.



Draw an object below that has at least one line of symmetry.